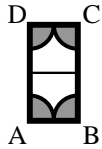


Paper Pool Tables

NAME _____

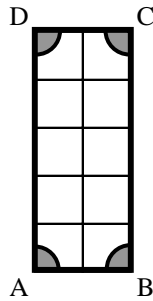
On each of the pool tables below, a ball is hit from corner A at a 45° angle. Determine the corner in which the ball will eventually land, the number of hits, and the dimensions of the table.



Corner: _____

Hits: _____

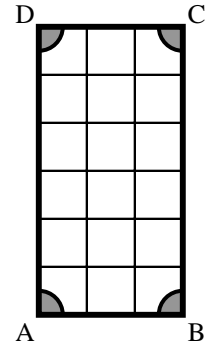
Dimensions: _____



Corner: _____

Hits: _____

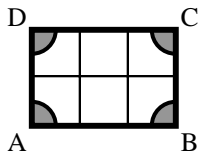
Dimensions: _____



Corner: _____

Hits: _____

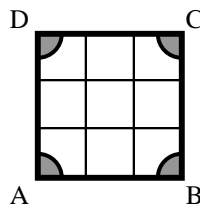
Dimensions: _____



Corner: _____

Hits: _____


Dimensions: _____



Corner: _____

Hits: _____

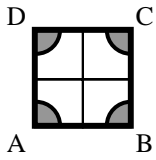
Dimensions: _____



Corner: _____

Hits: _____

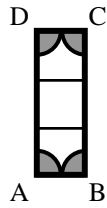
Dimensions: _____



Corner: _____

Hits: _____

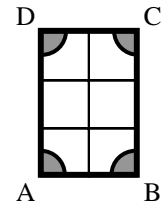
Dimensions: _____



Corner: _____

Hits: _____

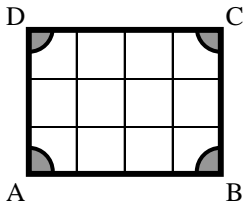
Dimensions: _____



Corner: _____

Hits: _____

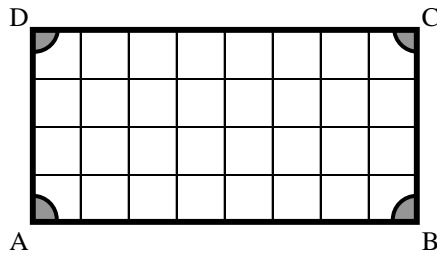
Dimensions: _____



Corner: _____

Hits: _____

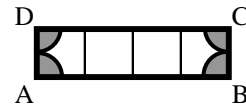
Dimensions: _____



Corner: _____

Hits: _____

Dimensions: _____



Corner: _____

Hits: _____

Dimensions: _____